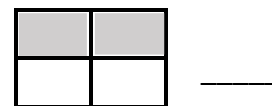

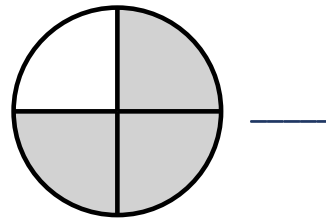
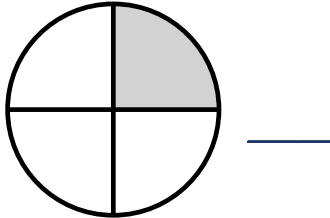


1.3 Brüche lesen und schreiben

Aufgabe 1:


Welcher Bruch gehört dazu?

Setze ein: $\frac{2}{4}, \frac{3}{4}, \frac{1}{6}, \frac{1}{4}, \frac{1}{3}, \frac{2}{3}$

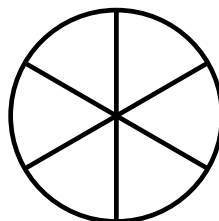


Aufgabe 2:


Male den passenden Anteil aus.



$\frac{3}{4}$



$\frac{2}{6}$



$\frac{1}{3}$

Aufgabe 3:

Wie viel Pizza ist noch da?

Setze ein: $\frac{3}{4}$, $\frac{1}{4}$, $\frac{1}{2}$, $\frac{1}{3}$





